

May 2017

Total No. of Questions—8]

[Total No. of Printed Pages—5

Seat No.	
-------------	--

[5152]-561

S.E. (Computer) (I Sem.) EXAMINATION, 2017

DISCRETE MATHEMATICS

(2015 PATTERN)

Time : Two Hours

Maximum Marks : 50

N.B. :— (i) Figures to the right indicate full marks.

(ii) Assume suitable data, if necessary.

1. (a) Explain the concept of countably infinite set with example. [3]

(b) Use mathematical induction to show that, for all $n \geq 1$.

$$1 + 2 + 3 + \dots + n = \frac{n(n+1)}{2}. \quad [3]$$

(c) Let $A = \{1, 2, 3, 4\}$ consider partition

$$P = \{\{1, 2, 3\}, \{4\}\},$$

of A . Find the equivalence relation R on A determined by P . [3]

(d) Let $A = \{1, 2, 3\}$ R is the relation on A whose matrix is :

$$M_R = \begin{bmatrix} 1 & 1 & 1 \\ 0 & 0 & 1 \\ 0 & 0 & 1 \end{bmatrix}$$

show that R is transitive. [3]

Or

P.T.O.

2. (a) (i) Find DNF of :

$$((p \rightarrow q) \cap (q \rightarrow p)) \vee p.$$

(ii) Find CNF of :

$$p \leftrightarrow (\sim p \vee \sim q). \quad [3]$$

(b) In the survey of 260 college students, the following data were obtained :

64 had taken a maths course,

94 had taken a cs course,

58 had taken a business course,

28 had taken both a maths and a business course,

26 had taken both a maths and a cs course,

22 had taken both a cs and a business course,

14 had taken all types of courses.

How many students were surveyed who had taken none of the three types of courses. [3]

(c) Let $A = \mathbb{Z}^+$ the set of positive integers, and let

$$R = \{(a, b) \in A \times A \mid a \text{ divides } b\}$$

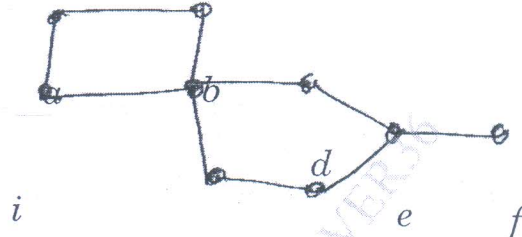
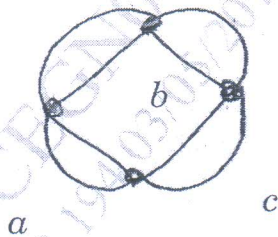
Is R symmetric, asymmetric or antisymmetric. [3]

(d) Find transitive clousure using Warshall algorithm :

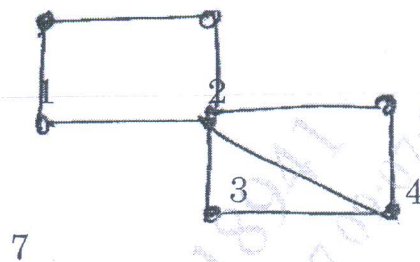
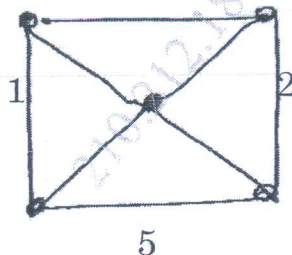
$$M_R = \begin{bmatrix} 0 & 1 & 0 & 0 \\ 1 & 0 & 1 & 0 \\ 0 & 0 & 0 & 1 \\ 0 & 0 & 0 & 0 \end{bmatrix}. \quad [3]$$

3. (a) How many words of three distinct letters can be formed from the letters of the word MAST ? [3]

- (b) How many different seven-person committees can be formed each containing three women from an available set of 20 women and four men from an available set of 30 women. [3]
- (c) Check whether the graph has an Euler circuit, Euler path, justify : [3]



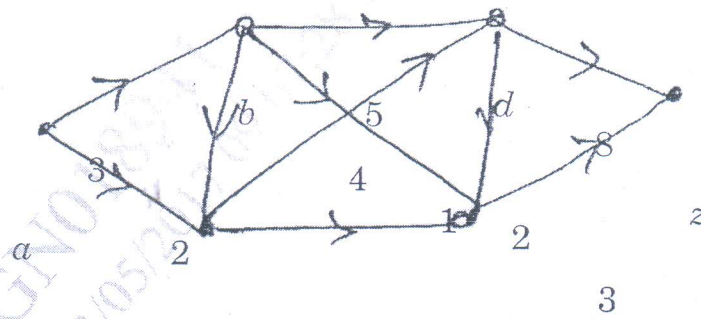
- (d) How many colours required to colour $k_{m \times n}$, why ? [3]
 (Graph G_1) Or (Graph G_2)
4. (a) How many distinguishable words that can be formed from the letters of MISSISSIPPI ? [3]
- (b) Compute the number of distinct five-card hands that can be dealt from a deck of 52 cards. [3]
- (c) Determine whether the following graph has a Hamiltonian circuit or Hamiltonian path. [3]



- (d) Write 45 applications of graph theory in the field of data analytics. (Graph G_1) (Graph G_2) [3]
5. (a) Use labeling procedure to find a maximum flow in the transport network given in the following figure. Determine the corresponding

minimum cut.

[7]

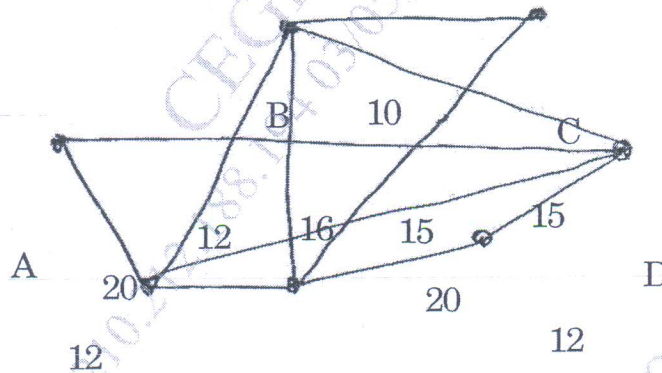


(b) Explain the following : [6]

- (1) Difference between ^c binary tree and ^e binary search tree.
- (2) Rooted tree
- (3) Cut-sets.

Or

6. (a) Find minimum spanning tree for given graph using Kruskal's algorithm. [6]



(b) Explain the following terms : E [7]

- (i) Application of cutset in computer engineering domain
- (ii) Prefix code construction using Huffman coding.
- (iii) Properties of trees.

7. (a) Prove that :

$$(a + b\sqrt{2}, +, \times)$$

where $\bar{a}, b \in R$ is integral domain. [6]

(b) Explain isomorphism and homomorphism of two semigroups. [3]

(c) Prove that every cyclic group is an abelian group. [4]

Or

8. (a) Let G be set of all non-zero real numbers and let :

$$a * b = \frac{ab}{2},$$

show that $(G, *)$ is an abelian group. [6]

(b) Explain Galois theory. [3]

(c) Explain properties of binary operations. [4]